



DELHI PUBLIC SCHOOL

CHAS, BOKARO

(Academic Session: 2023 – 24)

SUMMER HOLIDAYS ACTIVITIES AND ASSIGNMENTS

Class – III

ENGLISH

Instructions:

- In general, all the questions are to be answered in the classwork notebooks.
- Projects and activities are to be done as per the instructions given along with the questions.
- Summer Vacation assignment will be the part of Internal Assessment.
“Reading is to the mind what exercise is to the body.”
- To promote the joy of reading and to make reading a habit among students the Board is making available the CBSE Reading App. Refer one story from Freedom App to promote Read and Grow activity and prepare any two puppets based on your story.
- Questions and answers shall be done in classwork notebook.

Read the passage carefully and then answer the questions given below:

1. Read the passage and answer the questions that follow:

The Hockey Wizard



Dhyan Chand is famous as the 'Hockey Wizard' all over the world. Today's sports fans know little about this genius who left an indelible mark on the game. Decades back, Dhyan Chand was one of world's top sportsmen – in league with the great Don Bradman, Jesse Owens and Babe Ruth. Major Dhyan Chand Singh was an Indian hockey player. He was part of the gold winning Indian team in three Olympic Games. He was awarded Padma Bhushan, India's third highest civilian honour in 1956. He got the title “Chand” or “Moon” from his first coach Punkaj Gupta, who seeing his exceptional skills, had predicted that one day he would shine like a moon. Dhyan Chand was born on August 29, 1905. His father Sameshwar Dutt Singh was an Indian Army Subedar, who played hockey in the army. He joined the Indian Army at the tender age of sixteen as a Sepoy of the Punjab Regiment. Subedar – Major Bhole Tiwari of the Brahmin Regiment noticed his dribbling skills. Tiwari himself was a good hockey player. He recognised the talent in Dhyan and became his mentor. Tiwari laid the foundations of his game. Dhyan with his hard work and talent became a wizard of hockey. His great control on the ball in the field left the spectators awestruck. Once in Tokyo, the officials broke his hockey stick to search for a magnet inside it. They thought that there was a magnet in his hockey and so the ball stuck to it. He said good bye to International Hockey in 1948.

Complete the following sentences:

- a) Dhyan Chand was famous all over the world as _____.
- b) Dhyan's father _____ was _____ in the army.
- c) The title “Chand” was given to him by _____ because _____.
- d) His mentor was _____ and he laid _____.
- e) Tokyo officials broke his stick to _____.
- f) _____ said goodbye to International Hockey in _____.

2. Find proper nouns and common nouns from the passage.


3. Change the following sentences into negative sentences:

- i) Dhyan Chand was one of world's top sportsmen.
- ii) Dhyan with his hard work and talent became a wizard of hockey.

4. Write the antonym of:

- i) Famous
- ii) First
- iii) Inside

5. Make a working model of types of noun. Refer to the given sample below.



Subject Integration

Commonwealth Games 2022

The Commonwealth Games, 2022 started on 28th July 2022 in Birmingham. The games were scheduled till 8th August 2022.

The table mentioned below shows the Commonwealth Games 2022 Medal Tally till 5th August 2022.

Commonwealth Games 2022 Medal Tally				
Country	Gold	Silver	Bronze	Total
Australia	67	57	54	178
England	57	66	53	176
Canada	26	32	34	92
India	22	16	23	61
New Zealand	20	12	17	49

Answer the following questions based on above table:

- (i) Arrange the list of total number of Medals in ascending order.
- (ii) How many less medals New Zealand won than Australia?
- (iii) In Roman Numerals, 92 is written as _____.
- (iv) Round off 61 to the nearest ten is _____.
- (v) Is 2022 a leap year? Give reason.

Roman Numeral Project

Instructions:

- **Make a model of wall clock with Roman numerals using waste materials.**



Content Based Questions

1. Juicy Bars



- (i) The cost of one ice-cream is Rs. 45. Find the cost of 5 such ice-creams.
- (ii) The weight of all the 5 ice-creams is 375 g. Find the weight of 1 such ice-cream.

2. My Garden



- (i) The capacity of watering-can is 2,250 ml of water. If each plant requires 75 ml of water, then how many plants can you water?

3. **Do as directed:**

- (i) Arrange 4,689; 432 and 31 in column and add them.
- (ii) Find the sum of face value and place value of '6' in the numeral 4,632.
- (iii) If ☺ = 3,486 and ☆ + 2,341 = ☺ Find the value of ☆.

Note: This work should be done in Mathematics class notebook.

हिंदी

1. पहले तो कॉमनवेल्थ गेम्स में केवल 6 खेल शामिल किए गए थे। आज उसमें कुल 10 मुख्य खेलों को शामिल किया गया है जो कि इस प्रकार हैं, आप इन खेलों के चित्र एक चार्ट पेपर पर चिपकाएँ—

तैराकी	एथलीट्स	बैडमिंटन	बॉक्सिंग
हॉकी	लॉन बाउल्स	रग्बी सेवन्स	स्क्वैश
वेटलिफ्टिंग	नेट बॉल (केवल महिलाओं के लिए)		

2. कॉमनवेल्थ गेम्स में शुरुआत में कुल 11 देशों ने भाग लिया था और अब 72 देश इस खेल में भाग लेते हैं, जिनमें नीचे दिए गए देश शामिल हैं। किन्हीं 10-15 देशों को विश्व मानचित्र पर दर्शाकर उनके नाम भी लिखें—:

1. एंगुइला
2. अंतिगुया और बार्बूडा
3. ऑस्ट्रेलिया
4. बहामा
5. बांग्लादेश
6. बारबाडोस
7. बेलीज
8. बरमूडा
9. बोत्सवाना
10. ब्रिटिश वर्जिन आइलैन्ड्स
11. ब्रुनेई
12. कैमरून
13. कनाडा
14. केमन द्वीपसमूह
15. कुक द्वीपसमूह
16. साइप्रस
17. डोमिनिका
18. इंग्लैंड
19. इस्वातिनि
20. फॉकलैंड आइलैंड
21. फिजी
22. घाना
23. जिब्राल्टर
24. ग्रेनेडा
25. ग्वेर्नसे
26. गुयाना
27. भारत
28. मैन द्वीप
29. जमैका
30. जर्सी
31. केन्या
32. किरिबाती
33. लिसोतो
34. मलावी
35. मलेशिया
36. मालदीव
37. माल्टा
38. मॉरीशस
39. मोंटेसेराट
40. मोजाम्बिक
41. नामिबिया
42. नाउरू
43. न्यूजीलैंड
44. नाइजीरिया
45. न्यू
46. नॉरफॉक द्वीप
47. उत्तरी आयरलैंड
48. पाकिस्तान
49. पापुआ न्यू गिनी
50. रवांडा
51. समोआ
52. स्कॉटलैंड
53. सेशल्स
54. सेरा लिओन
55. सिंगापुर
56. सोलोमन इस्लैंड्स
57. दक्षिण अफ्रीका
58. श्रीलंका
59. सेंट हेलेना
60. सेंट किट्स एंड नेविस

61. सेंट लूसिया

62. सेंट विसेंट और ग्रेनेडाइंस

63. तंजानिया

64. गाम्बिया

65. टोंगा

66. त्रिनिदाद और टोबैगो

67. तुर्क और कैकोस द्वीप समूह

68. तुवालू

69. युगांडा


70. वानुअतु (टंदनजन)

71. वेल्स

72. जाम्बिया

3. पढ़िए, समझिए और नए शब्दों का निर्माण करें—

क) न् + य = न्य



शून्य

ख) स् + थ = स्थ



स्थान

ग) च् + च = च्च



बच्चा

ग) क् + क = क्क



मक्का

घ) ल् + ल = ल्ल



बिल्ली

ड.) त् + थ = त्थ



पत्थर

4. दिए गए प्रश्नों के उत्तर अपने शब्दों में दें—

क) दोनों हंसों ने अपने मित्र कछुए को क्या उपाय बताया?

ख) हिमालय को भारत का ऊँचा मस्तक क्यों कहा गया है?

ग) भाषा के कितने रूप होते हैं? उदाहरण सहित लिखें।

घ) संयुक्त व्यंजन कितने होते हैं? प्रत्येक व्यंजन से तीन-तीन शब्द बनाएँ।

5. कॉमनवेल्थ गेम्स से संबंधित किन्हीं पाँच समाचारों को इकट्ठा करके एक चार्ट पेपर पर लगाएँ।

ENVIRONMENTAL STUDIES

PROJECT WORK:


1. Commonwealth Games are often referred to as the Friendly Games which was started as a multi-sport event among the Commonwealth Countries. Participants from various Commonwealth Countries participate in various sporting events since 1930 and promote



the sportsmen's spirit. In the commonwealth games 2022, more than 4600 sports people have participated from 72 nations across the globe. Make a chart and enlist the five countries with their capital and main cuisine.

Name of country	Capital	Cuisine

2. Identify the names of sports played in Commonwealth games:



3. Define the following.

- a) Joint family
- b) nuclear family
- c) small family
- d) big family
- e) single parent family

4. Enlist five moral values which you carry from your family members.

5. Activity: Siblings usually share only 50 percent of the similarity passed down from their parents. Second, even if siblings attend the same school, they may hang out in different crowds, which in turn influences their personality.

- a) Observe and find out 5 differences between you and your siblings.
- b) Observe and find out 5 similarities between you and your siblings.

COMPUTER

1. On a colourful chart paper, make a hardware device using any one letter from your or any one of your family member name.

For example :- Mayank - Monitor / Mouse / Keyboard

2. Using 2 dimensional shapes (like square, triangle, rectangle etc.) create a model of **Robot** on the chart paper.

Picture is given for reference:



3. Draw and write down the steps of making orange juice based on the concept of IPO cycle in your work education notebook.

GERMAN

1. Draw/paste the flag of Germany and its 9 neighbouring countries on the Chart Paper.
(Dänemark; Polen; Tschechien; Österreich; Schweiz; Frankreich; Luxemburg; Belgien; Niederlande)

2. Complete the given word.



a) A wie __pfel



b) B wie __all



c) C wie __lown



d) D wie __rache



e) E wie __lefant



f) F wie __lugzeug



g) G wie __itarre



h) H wie __aus



i) I wie __gel




j) J wie __acke



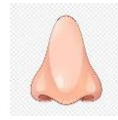
k) K wie __atze



l) L wie __öwe



m) M wie __ango



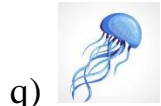
n) N wie __ase



o) wie __range



p) P wie __papagei



q) Q wie __ualle



r) R wie __ing



s) S wie __onne



t) T wie __isch



u) U wie __hr



v) V wie __ase



w) W wie __wagen



x) X wie __elofon



y) Y wie __ak

3. Complete Das ABC

A D F I K M P R T U Z

4. Z to A

Z U R N K F A.

